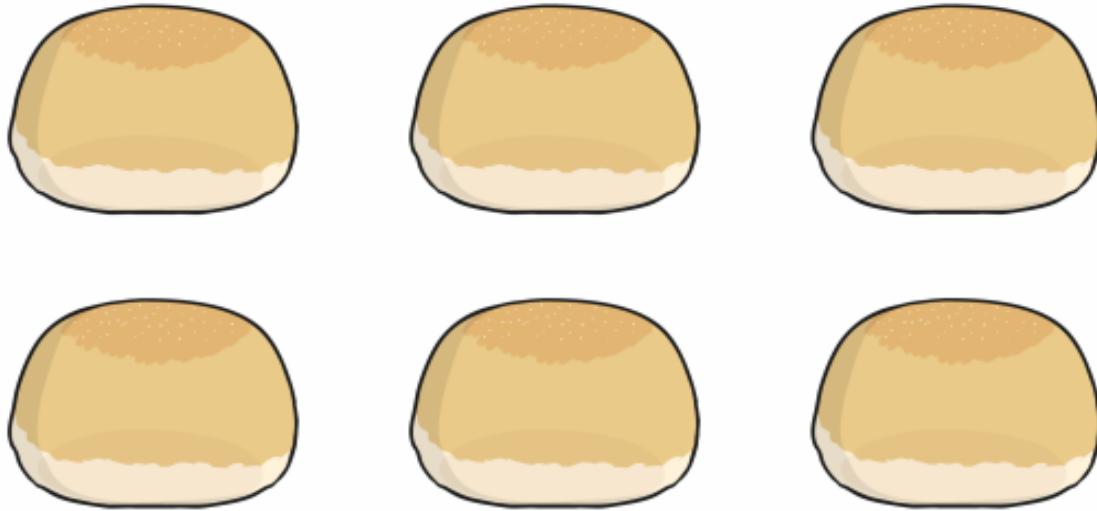


Food division problems




1. James has 6 bread rolls. He shares them equally with his sister. How many do they have each?



Food division problems



2. Evie buys 8 oranges at the shop. She shares them equally with her friend. How many oranges do they have each?




5. A shop has 4 bags of crisps. Two people want to buy them. How many bags can they each buy if they are shared equally?



Food division problems



6. Javeria has 12 potatoes. She shares them with her brother. How many do they have each?



Food division problems



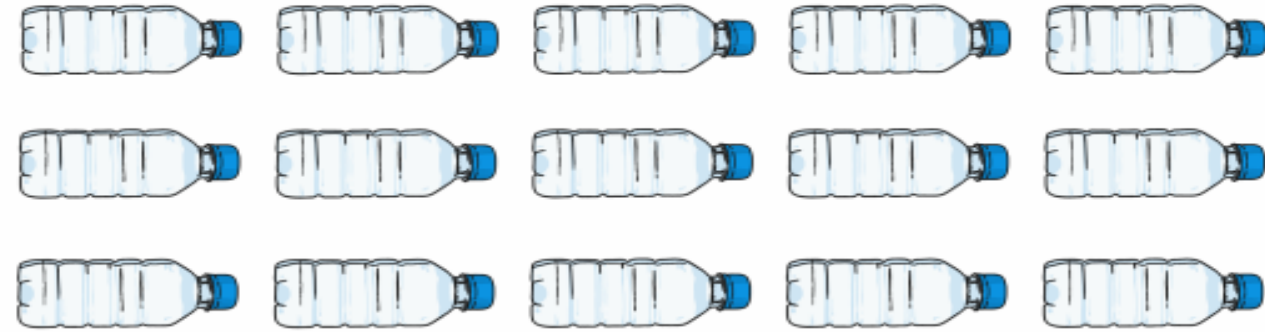
7. Olivia buys 15 boxes of cereal for her and her two brothers. They share them equally. How many boxes of cereal will they have each?



Food division problems



1. Michelle buys 15 bottles of water. She shares them equally between her three children. How many do they each get?



Food division problems



8. Amy buys 10 cupcakes. She shares them equally with her sister. How many cupcakes do they each have?



Food division problems



2. A shop has 40 sausage rolls on sale. If five friends buy them and share them equally, how many do they each get?





Food division problems



7. Phil bought 35 mini cakes for a birthday party. Four other children came and shared the cakes equally with Phil. How many cakes did each child get?



Food division problems




5. Dan gives his five children their pocket money to spend at the shop. He has £20. How much would each child get if they shared the money equally?



Food division problems



8. A punnet has 24 strawberries in it. How many strawberries would two people get each if they shared them equally?



Food division problems



6. Sidra bought a bag of 50 chicken nuggets and eats 5 of them for each meal. How many meals will the bag last for?

